
Scales and Keys Diagnostic Quiz

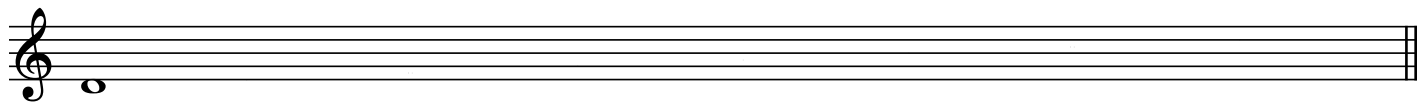
In this quiz, you'll see where your scale and key knowledge is at. Once you've finished the entire quiz, open the Answer Key (found on the website next to this file) and grade your work. If you get a passing score for that section, you can skip that material in the course (though review can never hurt!) If you get a lower than passing score, work through the course material indicated for that section. Watch the videos, do the drills and complete the worksheets to level up your knowledge in those key areas. Be thorough and diligent in your work! A solid grasp of this material is vital to succeeding in your college level music courses.

SECTION 1) Major Scales

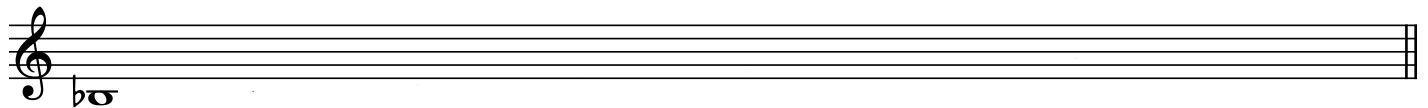
Write out the following major scales. Check your clef!

If your score is less than 4 out of 5, work through [\[Major Scales\]](#) on the course's site.

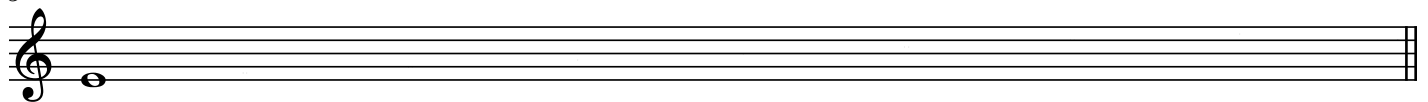
D major




2 Bb major




3 E major



4 Ab major



5 G major

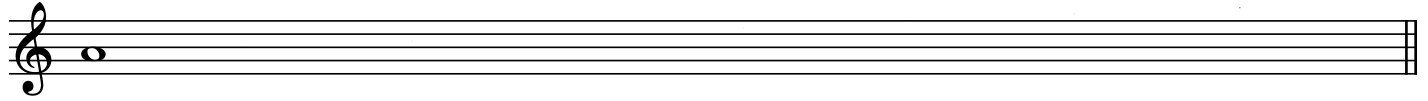


SECTION 2) Natural Minor Scales

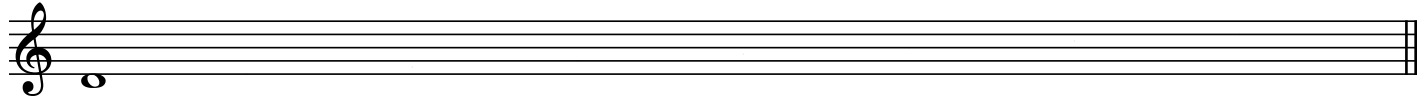
Write out the following minor scales. Check your clef!

If your score is less than 4 out of 5, work through [\[Minor Scales\]](#) on the course's site.

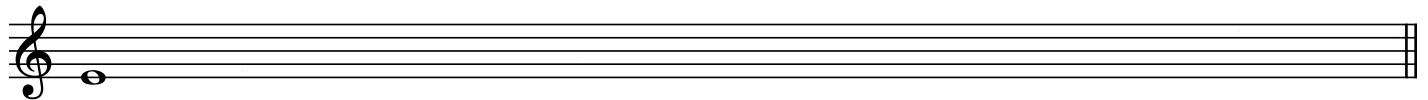
A natural minor




2 D natural minor




3 E natural minor



4 C natural minor



5 G natural minor



SECTION 3) Scale Degrees

A key and scale degree is given. **Write down the note that matches the scale degree for that key.** Choose your octave! An example: If I see "C major, 5th", I would write a G as a whole note on the staff. Check your clef!

If your score is less than 6 out of 8, work through [\[Scale Degrees\]](#) on the course's site.

G major, 4th

D major, 3rd

G minor, 3rd

E \flat major, 7th

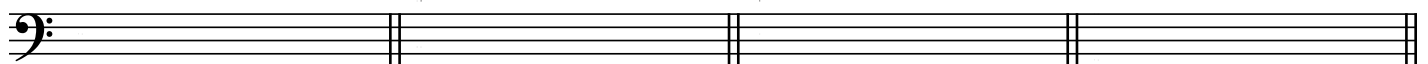


5 A \flat major, 5th

B major, 2nd

C major, 3rd

F minor, 3rd




SECTION 4) Key Signatures


For each major key given, write out the key signature.

If your score is less than 8 out of 10, work through **[Recognizing and Writing Key Signatures]** on the course site.

D major	Bb major	E major	Ab major	G major
---------	----------	---------	----------	---------



6 F major	B major	Db major	F# major	Gb major
-----------	---------	----------	----------	----------



SECTION 5) Relative and Parallel Keys

Write the name of the relative and parallel minor key for the following major keys.

If your score is less than 4 out of 5, work through **[Minor Keys, Relative and Parallel Key]** on the course site.

	Parallel Minor	Relative Minor
1) C major	_____	_____
2) G major	_____	_____
3) Eb major	_____	_____
4) A major	_____	_____
5) Ab major	_____	_____